

GC INTERNATIONAL SCIENCE OLYMPIAD - LEVEL BUDS SAMPLE PAPER

Question 1

Identify the weather from the below picture.



- A. Fall B. Summer C. Cloudy D. Windy

Key: D

Question 2


WEB is the home of_____?




- A. Bee B. Ant C. Spider D. Chipmunk

Key: C

Question 3

Which animal/s live at the zoo?



A. 	B. 	C. 	D. Both A and C
----------------------------------------------------------------------------------------	----------------------------------------------------------------------------------------	-----------------------------------------------------------------------------------------	-----------------

Key: D

Question 4

Where do camels live?



A. Polar region

B. Desert

C. Forest

D. Mountain

Key: B

Question 5

Which animals live in here?



A. Pig and donkey

B. Eagle and Lion

C. Polar bear and penguin

D. Leopard and hippo

Key: C

Question 6

Horse is a _____?

A. Plant eating animal

B. Meat eating animal


C. Plant and meat eating animal

Key: A


Question 7

Identify the whale from the following.

A.




B.



C.



D.



Key: D

Question 8

Identify the picture.



A. Plums

B. Grapes

C. Blueberries

D. None of these

Key: A

Question 9

What do you see in the given picture? Are they living or non-living things?



A. Moon, non-living

B. Sun, Living

C. Rainbow, non-living

D. I am not sure.

Key: C

Question 10

What Colour is the sun?



- A. Yellow B. Blue C. Purple D. Green

Key: A

Question 11

Which of these shape matches the shape of a coin?

- A. Circle B. Square C. Triangle D. Rectangle

Key: A

Question 12

Which of these doesn't lay eggs?

- A. Pigeon B. Cat C. Duck D. Both A and C

Key: B

Question 13

How many faces does a sphere have?



- A. 4 B. 1 C. 0 D. 3

Key: BC

Question 14

Identify what time of the day is shown in the picture.



- A. Evening B. Night C. Afternoon D. Morning

Key: B

Question 15

Identify the vegetable shown in the picture.



- A. Corn B. Broccoli C. Garlic D. Peas

Key: D

Question 16

Identify the season?



- A. Winter B. Spring C. Summer D. Fall

Key: D

Question 17

Find the mode of transport.



- A. Water B. Road C. Air

Key: A

Question 18

The Sun is bigger than the Earth

- A. False B. True

Key: B

Question 19

Water comes down from the clouds as wind.

- A. True B. False

Key: B

Question 20

When the sun appears, it's called a _____.






- A. Sunset B. Sunrise

Key: B

Question 21


Identify the picture from the following options that belongs to the group shown in the below picture.



Key: D

Question 22

Which of these cannot move from one place to other on its own?



D. Both A and B

Key: D

Question 23

Identify the bird.



- A. Kingfisher B. Weaver Bird C. Pelican D. Flamingo

Key: C

Question 24

Which of the following eat insects?

- A. Lizard B. Tiger C. Bat D. Both A and C

Key: D

Question 25

Identify the name of the given vegetable.



- A. Peas B. Celery C. Leek D. Asparagus

Key: D

Question 26

Identify the baby animal in the picture.



- A. Kid B. Kitten C. Calf D. Puppy

Key: A

Question 27

I found a ladybug on the grass. Is it a living thing or non-living?



- A. I do not know B. Living C. Non living

Key: B

Question 28

Identify the picture given below.



- A. Squid B. Seal C. Octopus D. Snail

Key: D

Question 29

Young one of rhino is _____?



- A. Cub B. Calf C. Foal D. Pup

Key: B

Question 30

A pig lives in a _____?

- A. Sty B. Shed C. Pond D. Barn

Key: A